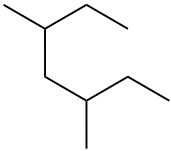
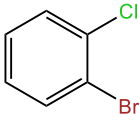
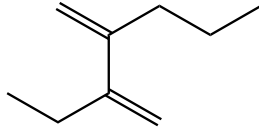
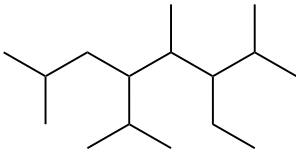
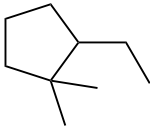
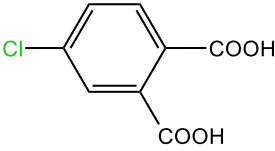
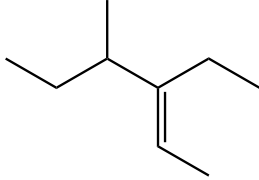
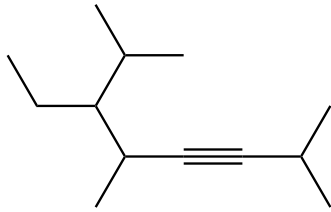
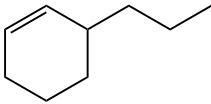
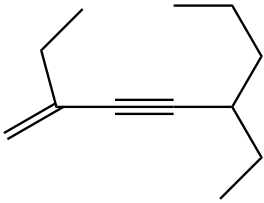
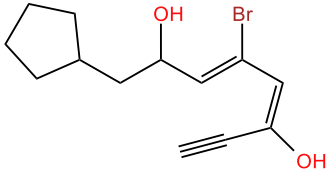
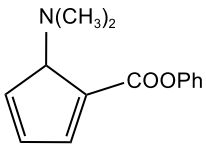
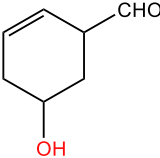
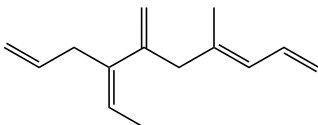
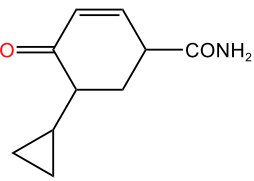
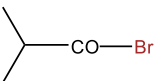
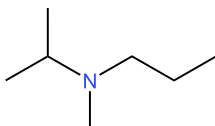


Series 2

EXERCISE 1

Provide the IUPAC name the following compounds.

a- 	b- 	c- 
d- 	e- 	f- 
g- 	k- 	l- 
j- 	k- 	l- 

<p>m-</p> 	<p>n-</p> 	<p>o-</p> 
<p>p-</p> 	<p>q.</p> 	

Exercise 2 :

Draw the structural formulas for the following compounds:

- | | |
|--|--|
| a. 4-isopropyl-5-propyloctane | l. 2-bromo-3-isopropylbut-3-enoic acid |
| b. 4-hydroxy phenyle benzoate | m. methyle cyclohexane carboxylate |
| c. N-methyl-N-propylisopropane amine | n. cyclopentane carboxamide |
| e. 3-methylpent-3-en-2-one | o. 3-fluorobutan-2-one |
| f. 4-bromo-3,5-dimethoxyphenol | p. 4-methyl-5-(1-methylprop-2-enyl)undeca-6,9-dien-1-yne |
| g. Pent-3-yn-2-ol | |
| h. BenzylvinylKetone (vinyl = ethenyl) | |
| i. cyclopent-2-ene-1-ol | |
| j. N-butylpropanamide | |
| k. 4-formylbutanoic acid | |