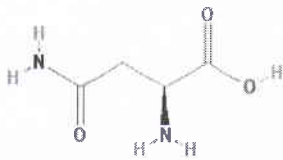


Exercice 1

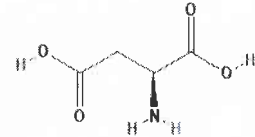
5

-Donner le **nom systématique** et le **nom commun** (d'usage) des composés suivants:



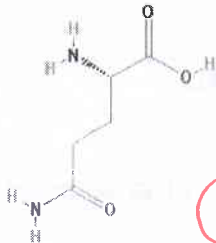
1

acide 2,4-diamino-4-oxobutanoïque = l'acide asparagine (Asn)



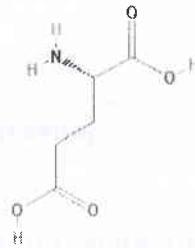
1

acide 2-aminobutanedioïque = l'acide aspartique (Asp)



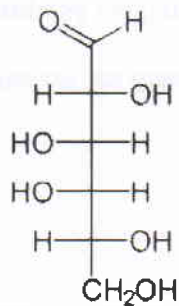
1

acide 2,5-diamino-5-oxopentanoïque = aminoacide glutamine (Gln)



1

acide 2-aminopentanedioïque = aminoacide glutamique (Glu)



1

D-Galactose

- (2R,3S,4S,5R)-2,3,4,5,6-pentahydroxyhexanal