

Exercice 01.

1. Le taux volumétrique de compression

$$\frac{T_2}{T_1} = \left(\frac{V_1}{V_2}\right)^{\gamma-1} \Rightarrow \frac{T_2}{T_1} = \varepsilon^{\gamma-1} \Rightarrow \varepsilon = \left(\frac{T_2}{T_1}\right)^{\frac{1}{\gamma-1}} = \left(\frac{586}{293}\right)^{\frac{1}{1,4-1}} = 5,42$$

2. Le rendement du cycle :

$$\eta_{th} = 1 - \frac{T_1}{T_2} = 1 - \frac{1}{\varepsilon^{\gamma-1}} = 1 - \frac{1}{5,42^{1,4-1}} = 0,4914 = 49,14 \%$$

Exercice 02.

1. La pression et la température à chaque point du cycle.

A. Point 1 :

$P_1 = 95 \text{ kPa}$. $T_1 = 300 \text{ K}$.

B. Point 2 :

$$\frac{T_2}{T_1} = \left(\frac{V_1}{V_2}\right)^{\gamma-1} \Rightarrow T_2 = T_1 \times \left(\frac{V_1}{V_2}\right)^{\gamma-1} = 689,2 \text{ K}$$

$$\frac{P_2}{P_1} = \left(\frac{V_1}{V_2}\right)^{\gamma} \Rightarrow P_2 = P_1 \times \left(\frac{V_1}{V_2}\right)^{\gamma} = 1746,02 \text{ kPa}$$

$P_2 = 1746,02 \text{ kPa}$. $T_2 = 689,2 \text{ K}$.

C. Point 3 :

$P_2 = P_3 = 5719,81 \text{ kPa}$.

$$q_1 = C_v \times (T_3 - T_2) \Rightarrow T_3 = \frac{q}{C_v} + T_2 = 1734 \text{ K}$$

$$\frac{T_3 V_3}{P_3} = \frac{T_2 V_2}{P_2} \Rightarrow P_3 = \frac{T_3}{T_2} P_2 = 4392 \text{ kPa}$$

$P_3 = 4392 \text{ kPa}$. $T_3 = 1734 \text{ K}$.

D. Point 4 :

$$\frac{P_3}{P_4} = \left(\frac{V_4}{V_3}\right)^{\gamma} \Rightarrow P_4 = P_3 \left(\frac{V_3}{V_4}\right)^{\gamma} = 239 \text{ kPa}$$

$$\frac{T_3}{T_4} = \left(\frac{V_3}{V_4}\right)^{\gamma-1} \Rightarrow T_4 = T_3 \times \left(\frac{V_4}{V_3}\right)^{\gamma-1} = 755 \text{ K}$$

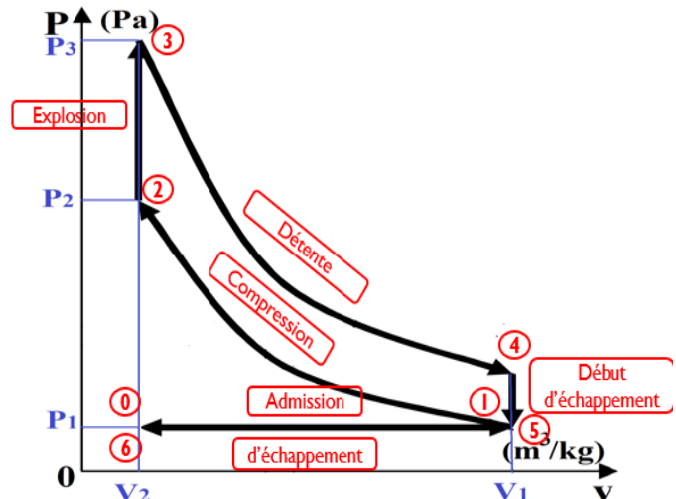
$P_4 = 239 \text{ kPa}$. $T_4 = 755 \text{ K}$.

2. Le travail par unité de masse

$$q_2 = C_v \times (T_4 - T_1) = 327 \text{ kJ/kg}$$

$$w = q_1 - q_2 = 423 \text{ kJ/kg}$$

3. Le rendement thermique du cycle.



$$\eta_{th} = \frac{w}{q_1} = 0,564 = 56,4 \%$$

Exercice 03.

1. La pression, le volume spécifique, et la température à chaque point du cycle.

A. Point 1 :

$$P_1 v_1 = RT_1 \Rightarrow v_1 = \frac{RT_1}{P_1} = \frac{0,287 \times 288}{100} = 0,827 \text{ m}^3/\text{kg}$$

$P_1 = 100 \text{ kPa}$. $T_1 = 288 \text{ K}$. $v_1 = 0,827 \text{ m}^3/\text{kg}$.

B. Point 2 :

$$\varepsilon = \frac{v_1}{v_2} \Rightarrow v_2 = \frac{v_1}{\varepsilon} = \frac{0,827}{18} = 0,046 \text{ m}^3/\text{kg}$$

$$\frac{T_2}{T_1} = \left(\frac{V_1}{V_2}\right)^{\gamma-1} \Rightarrow T_2 = T_1 \times \left(\frac{V_1}{V_2}\right)^{\gamma-1} = 288 \times 18^{1,4-1} = 915,17 \text{ K}$$

$$\frac{P_2}{P_1} = \left(\frac{V_1}{V_2}\right)^{\gamma} \Rightarrow P_2 = P_1 \times \left(\frac{V_1}{V_2}\right)^{\gamma} = 100 \times 18^{1,4} = 5719,81 \text{ kPa} = 5,72 \text{ MPa}$$

$P_2 = 5719,81 \text{ kPa}$. $T_2 = 915,17 \text{ K}$. $v_2 = 0,046 \text{ m}^3/\text{kg}$.

C. Point 3 :

$P_2 = P_3 = 5719,81 \text{ kPa}$.

$$q = C_p \times (T_3 - T_2) \Rightarrow T_3 = \frac{q}{C_p} + T_2 = \frac{1800}{1} + 915,17 = 2715,17 \text{ K}$$

$$P_3 v_3 = RT_3 \Rightarrow v_3 = \frac{RT_3}{P_3} = \frac{0,287 \times 2715,17}{5719,81} = 0,1362 \text{ m}^3/\text{kg}$$

$P_3 = 5719,81 \text{ kPa}$. $T_3 = 2715,17 \text{ K}$. $v_3 = 0,1362 \text{ m}^3/\text{kg}$.

D. Point 4 :

$v_4 = v_1 = 0,827 \text{ m}^3/\text{kg}$.

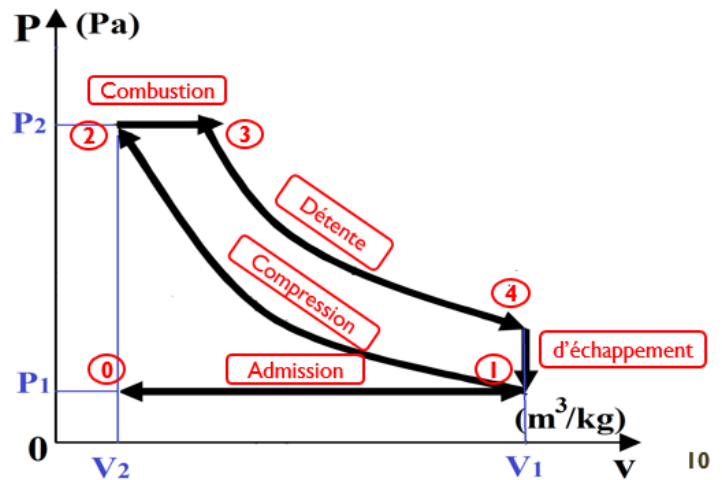
$$\frac{P_3}{P_4} = \left(\frac{V_4}{V_3}\right)^{\gamma} = \varepsilon'^{\gamma} \Rightarrow P_4 = \frac{P_3}{\varepsilon'^{\gamma}} = \frac{5719,81}{6,072^{1,4}} = 457,85 \text{ kPa}$$

$$P_4 v_4 = RT_4 \Rightarrow T_4 = \frac{P_4 v_4}{R} = \frac{457,85 \times 0,827}{0,287} = 1319,31 \text{ K}$$

$P_4 = 457,85 \text{ kPa}$. $T_4 = 1319,31 \text{ K}$. $v_4 = 0,827 \text{ m}^3/\text{kg}$.

2. Le rendement thermique du cycle.

$$\eta_{th} = 1 - \frac{1}{\gamma} \frac{(T_4 - T_1)}{(T_3 - T_2)} = 1 - \frac{1}{1,4} \frac{(1319,31 - 288)}{(2715,17 - 915,17)} = 0,5908 = 59,08 \%$$



Exercice 04 :

1. Le rapport V_3/V_2
 $T_1 = 22\text{ }^\circ\text{C} = 295\text{ K} \Rightarrow V_{r1} = 647,9, u_1 = 210,49\text{ kJ/kg}$
 $V_{r2} = \left(\frac{V_2}{V_1}\right) V_{r1} \Rightarrow V_{r2} = \left(\frac{1}{\epsilon}\right) V_{r1} = \left(\frac{1}{18}\right) 647,9$
 $= 36$

Avec le tableau A-17, $V_{r2} = 36$
 Avec l'interpolation linéaire

$x_a = V_{ra} = 36,61$
 $x_2 = V_{r2} = 36$
 $x_b = V_{rb} = 34,31$

$y_a = T_a = 880\text{ K}$
 $y_2 = T_2 = ?$
 $y_b = T_b = 900\text{ K}$

$$T_2 = T_a + (T_b - T_a) \times \frac{V_{r2} - V_{ra}}{V_{rb} - V_{ra}} = 880 + (900 - 880) \times \frac{36 - 36,61}{34,31 - 36,61} = \mathbf{874,7\text{ K}}$$

$T_2 = 874,7\text{ K}$

Avec l'interpolation linéaire

$x_a = V_{ra} = 36,61$
 $x_2 = V_{r2} = 36$
 $x_b = V_{rb} = 34,31$

$y_a = h_a = 910,56\text{ kJ/kg}$
 $y_2 = h_2 = ?$
 $y_b = h_b = 932,93\text{ kJ/kg}$

$$h_2 = h_a + (h_b - h_a) \times \frac{V_{r2} - V_{ra}}{V_{rb} - V_{ra}} = 910,56 + (932,93 - 910,56) \times \frac{36 - 36,61}{34,31 - 36,61} = \mathbf{916,49\text{ kJ/kg}}$$

$h_2 = 916,49\text{ kJ/kg}$

$$\frac{P_3 V_3}{T_3} = \frac{P_2 V_2}{T_2} \Rightarrow \frac{V_3}{V_2} = \frac{T_3}{T_2} = 2,027 \quad (P_2 = P_3, \text{Transformation isobare})$$

2. La chaleur ajoutée par unité de masse

Avec le tableau A-17, $V_{r2} = 36$

Avec l'interpolation linéaire

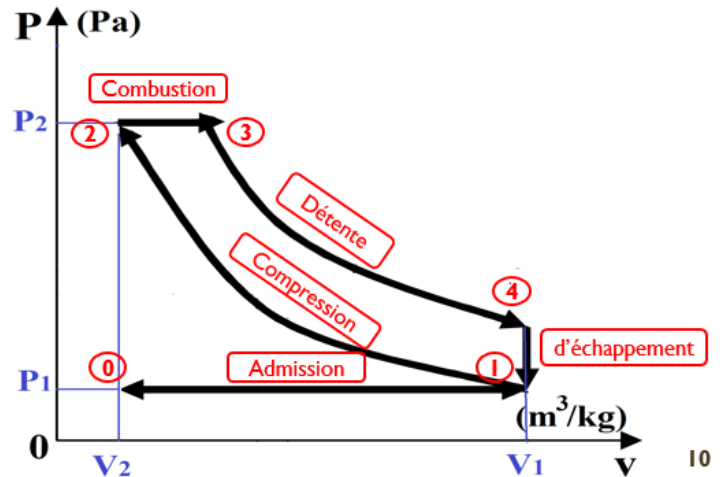
$x_a = T_a = 1750\text{ K}$
 $x_3 = T_3 = \mathbf{1773\text{ K}}$
 $x_b = T_b = 1800\text{ K}$

$y_a = h_a = 1941,6\text{ kJ/kg}$

$y_b = h_b = 2003,3\text{ kJ/kg}$

$$h_3 = h_a + (h_b - h_a) \times \frac{T_3 - T_a}{T_b - T_a} = 1941,6 + (2003,3 - 1941,6) \times \frac{1773 - 1750}{1800 - 1750}$$

$h_3 = 1969,98\text{ kJ/kg}$



$$q_1 = h_3 - h_2 = 1969,98 - 916,49 = \mathbf{1053,49 \text{ kJ/kg}}$$

3. Le rendement du cycle

Avec l'interpolation linéaire

$$x_a = T_a = 1750 \text{ K}$$

$$y_a = V_{ra} = 4,328$$

$$x_3 = T_3 = \mathbf{1773 \text{ K}} \quad y_i = V_{r3} = ?$$

$$x_b = T_b = 1800 \text{ K}$$

$$y_b = V_{rb} = 3,994$$

$$V_{r3} = V_{ra} + (V_{rb} - V_{ra}) \times \frac{T_3 - T_a}{T_b - T_a} = 4,328 + (3,994 - 4,328) \times \frac{1773 - 1750}{1800 - 1750} = 4,1743$$

$$V_{r3} = \mathbf{4,1743}$$

$$V_{r4} = \left(\frac{V_4}{V_3}\right) V_{r3} \Rightarrow V_{r4} = \left(\frac{V_4}{2,027 \times V_2}\right) V_{r3} = \left(\frac{\varepsilon}{2,027}\right) V_{r3} = \left(\frac{18}{2,027}\right) 4,1743 = 37,068$$

$$V_{r4} = \mathbf{37,0683}$$

$$x_a = V_{ra} = 39,12$$

$$y_a = u_a = 641,40 \text{ kJ/kg}$$

$$x_2 = V_{r4} = 37,068$$

$$y_2 = u_4 = ?$$

$$x_b = V_{rb} = 36,61$$

$$y_b = u_b = 657,95 \text{ kJ/kg}$$

$$u_4 = u_a + (u_b - u_a) \times \frac{V_{r4} - V_{ra}}{V_{rb} - V_{ra}} = 641,4 + (657,95 - 641,4) \times \frac{37,068 - 39,12}{36,61 - 39,12} = \mathbf{654,93 \text{ kJ/kg}}$$

$$u_4 = \mathbf{654,93 \text{ kJ/kg}}$$

$$q_2 = u_4 - u_1 = 654,93 - 210,49 = \mathbf{444,44 \text{ kJ/kg}}$$

$$w_{net} = q_1 - q_2 = 1053,49 - 444,44 = \mathbf{609,05 \text{ kJ/kg}}$$

$$\eta_{th} = \frac{w_{net}}{q_1} = \frac{609,44}{1053,49} = \mathbf{0,5785 = 57,85 \%}$$